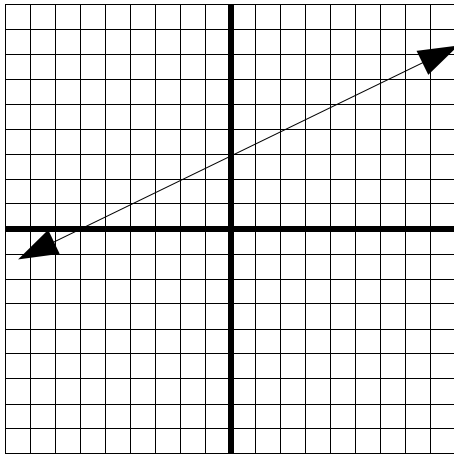


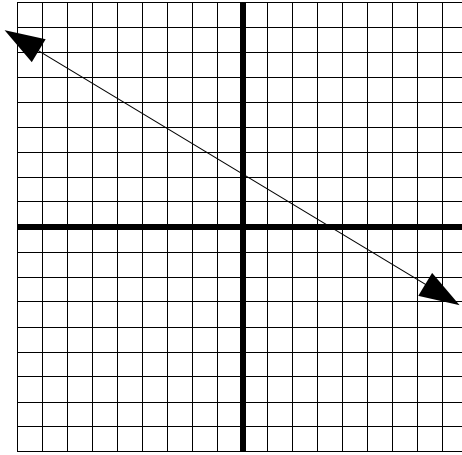
# MP. 6: SLOPES AND LINES

Name: \_\_\_\_\_

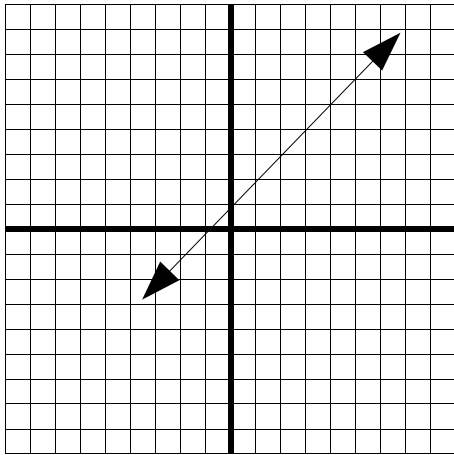
Find the slope and y-intercept, then write the slope-intercept form



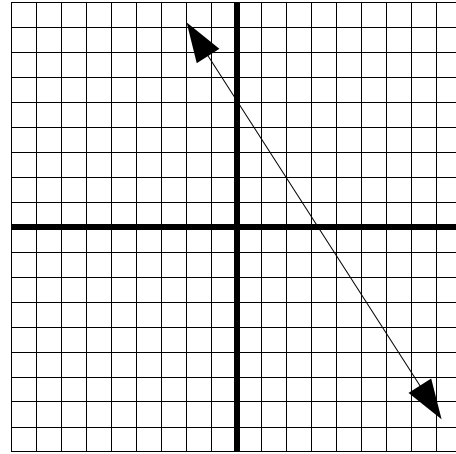
1.)  $m =$  \_\_\_\_\_,  $y\text{-int:}$  \_\_\_\_\_  
 $y =$  \_\_\_\_\_



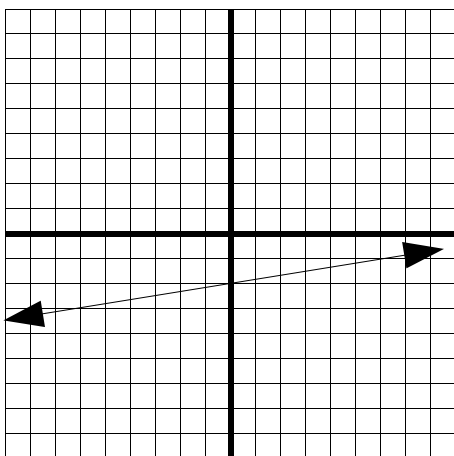
1.)  $m =$  \_\_\_\_\_,  $y\text{-int:}$  \_\_\_\_\_  
 $y =$  \_\_\_\_\_



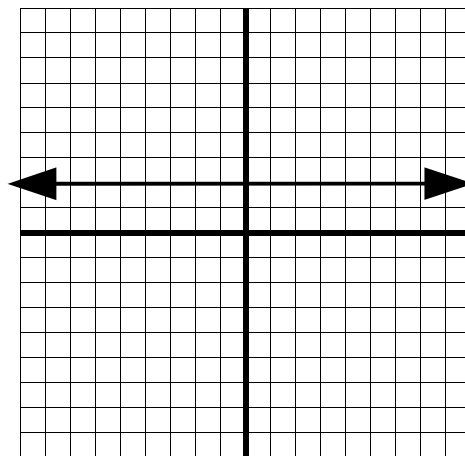
3.)  $m =$  \_\_\_\_\_,  $y\text{-int:}$  \_\_\_\_\_  
 $y =$  \_\_\_\_\_



4.)  $m =$  \_\_\_\_\_,  $y\text{-int:}$  \_\_\_\_\_  
 $y =$  \_\_\_\_\_



5.)  $m =$  \_\_\_\_\_,  $y\text{-int:}$  \_\_\_\_\_  
 $y =$  \_\_\_\_\_



6.)  $m =$  \_\_\_\_\_,  $y\text{-int:}$  \_\_\_\_\_  
 $y =$  \_\_\_\_\_